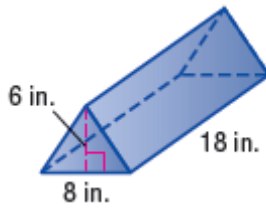



Lesson 2 Extra Practice***Volume of Triangular Prisms***

Find the volume of each prism. Round to the nearest tenth if necessary.

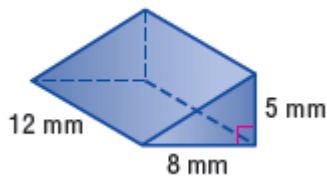
1.



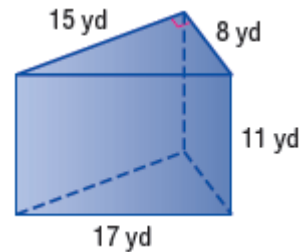
2.



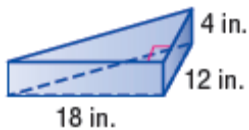
3.



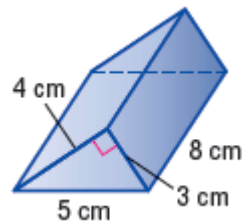
4.



5.



6.



7. Find the height of a triangular prism with a base area of 416 square feet and a volume of 9,152 cubic feet.
8. Find the height of a triangular prism with a base area of 9 square meters and a volume of 90 cubic meters.