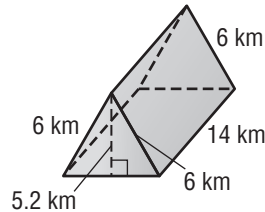


Lesson 4 Homework Practice

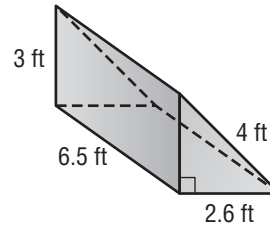
Surface Area of Triangular Prisms

Find the surface area of each triangular prism. Round to the nearest tenth if necessary.

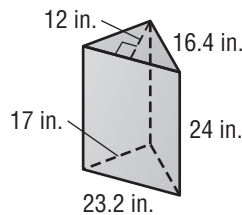
1.



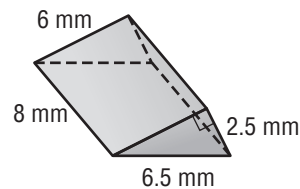
2.



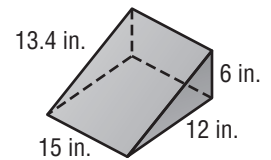
3.



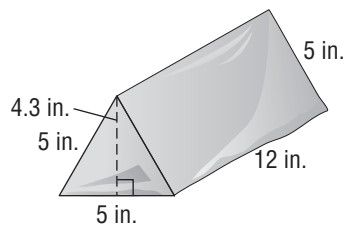
4.



5. One foam block on the playground at Teeny Tots Preschool is a triangular prism. About how much material is used to cover the block?



6. The box for the jungle animal figurines is in the shape of a triangular prism. What is the surface area of the box?



7. The storage box for a flag is in the shape of a triangular prism. What is the surface area of the box?

