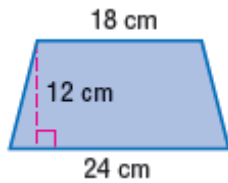


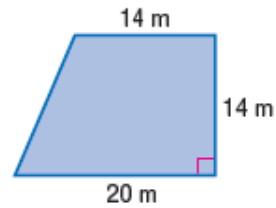
Lesson 3 Extra Practice***Area of Trapezoids***

Find the area of each trapezoid.

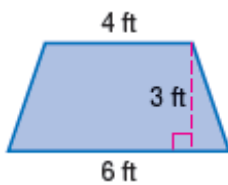
1.



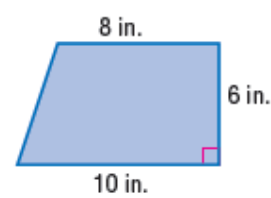
2.



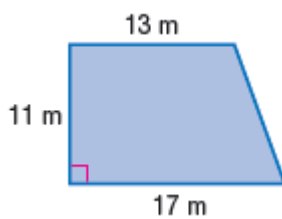
3.



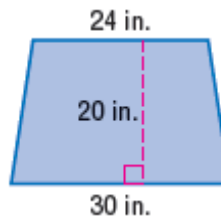
4.



5.



6.



7. A trapezoid has an area of 13.5 square inches. If the bases are 3 inches and 6 inches, what is the height of the trapezoid?
8. A trapezoid has an area of 95 square meters. If the bases are 7 meters and 12 meters, what is the height of the trapezoid?
9. A trapezoid has an area of 329 square feet. If the bases are 30 feet and 17 feet, what is the height of the trapezoid?