

Lesson 6 Homework Practice

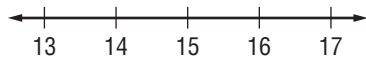
Write and Graph Inequalities

Write an inequality for each sentence.

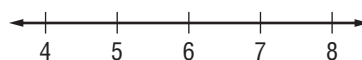
1. More than 2,500 people attended the convention.
2. Her earnings were no more than \$64.
3. The winning 5K race time was less than 22 minutes.
4. A checking-account balance is no more than \$500.
5. A maximum ceiling height of 8 feet was required in the new buildings.
6. A minimum number of 12 participants is required to hold a bike rally.

Graph each inequality on a number line.

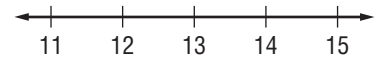
7. $x > 15$



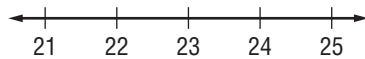
8. $s < 6$



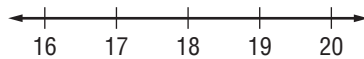
9. $b \geq 13$



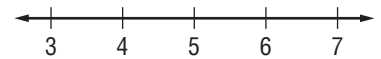
10. $x < 23$



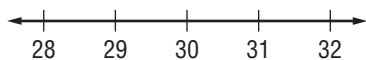
11. $r > 18$



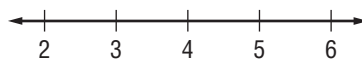
12. $r \geq 5$



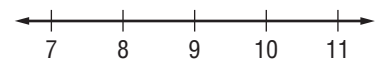
13. $x > 30$



14. $b \leq 4$



15. $a \geq 9$



16. **DONATIONS** Total donations at the Fireman's Ball failed to reach \$940.
Write and graph an inequality that represents the amount raised.

