

Homework Practice**Fractions as Percents**

Write each fraction as a percent.

1. $\frac{7}{20}$

2. $\frac{8}{25}$

3. $\frac{3}{10}$

4. $\frac{6}{10}$

5. $\frac{8}{20}$

6. $\frac{8}{10}$

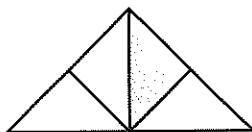
7. $\frac{3}{4}$

8. $\frac{7}{100}$


9. $\frac{4}{100}$

Write a percent to represent the shaded portion of each model.

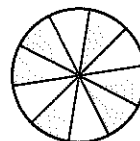
10.



11.



12.




13.



14.



15.



16. **ANALYZE TABLES** The table shows what fraction of a vegetable garden contains each kind of vegetable. What percent of the garden contains other kinds of vegetables?

Plant	Beans	Corn	Tomatoes	Other
Fraction	$\frac{1}{5}$	$\frac{1}{2}$	$\frac{1}{4}$	$\frac{1}{20}$

For more practice, go to www.connected.mcgraw-hill.com.