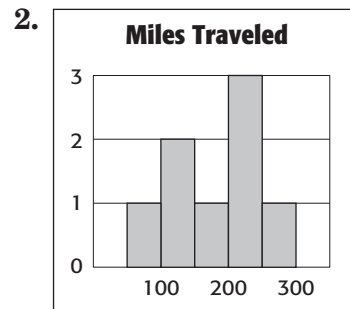
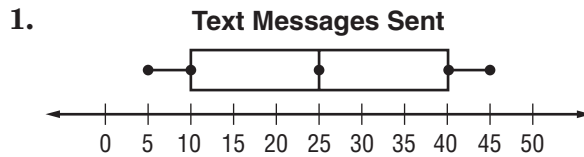


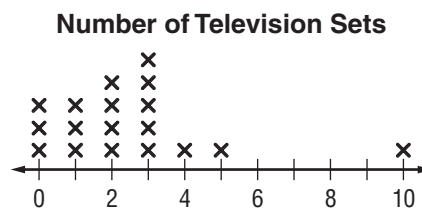
Lesson 4 Homework Practice

Shape of Data Distributions

For Exercises 1 and 2, describe the shape of each distribution.



3. The line plot shows the number of television sets owned by the families of various sixth grade students.



- Choose the appropriate measures to describe the center and spread of distribution. Justify your response based on the shape of the distribution.
- Write a few sentences describing the center and spread of the distribution using the appropriate measures.