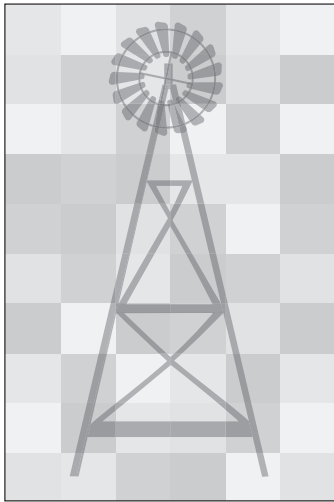


Enrich

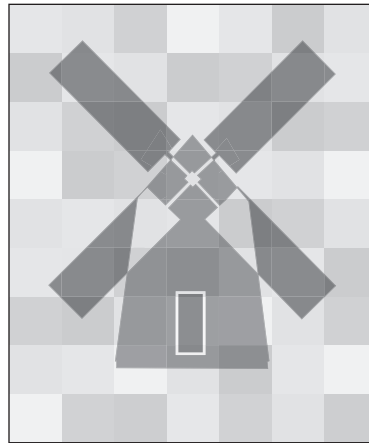
Quilts

A local shop sells quilts. Several of its quilts and quilt patterns are shown below. The length and width of each quilt are given along with its price.


Estimate the area of each quilt. Then estimate its price per square foot.



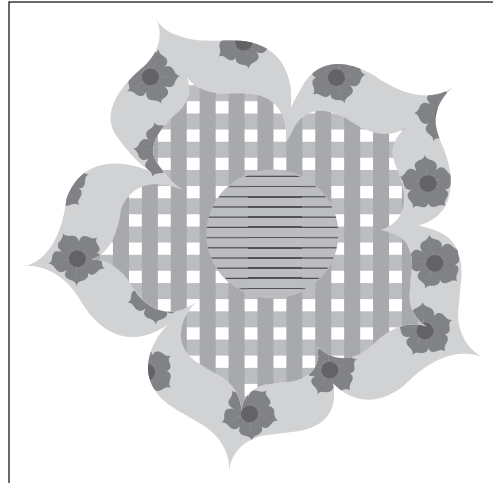
1. 7.5 feet by 5 feet, \$328.99



2. 8.25 feet by 6.75 feet, \$516.79



3. 9.5 feet by 6 feet, \$390.45



4. 8.25 feet by 8.25 feet, \$646.59

5. How accurate do you think your four estimates are of the price per square foot?
Explain your answer.